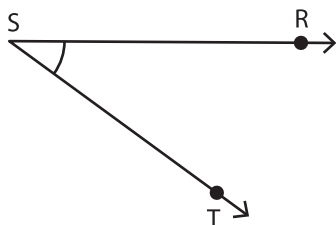


# Identifying the Vertex and Arms

Identify the vertex and arms that form each angle.

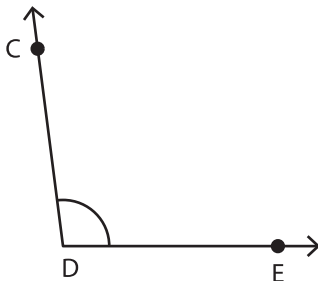
1)



Vertex: \_\_\_\_\_

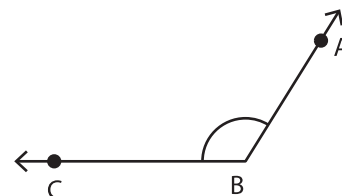
Arms: \_\_\_\_\_

2)



Vertex: \_\_\_\_\_

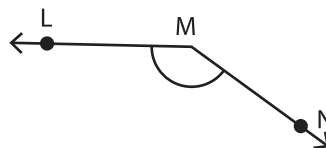
3)



Vertex: \_\_\_\_\_

Arms: \_\_\_\_\_

4)



Vertex: \_\_\_\_\_

Arms: \_\_\_\_\_

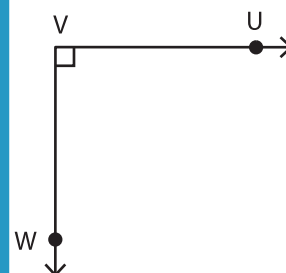
## PREVIEW

Gain complete access to the largest collection of worksheets in all subjects!

Members, please log in to download this worksheet.

Not a member? Please sign up to gain complete access.

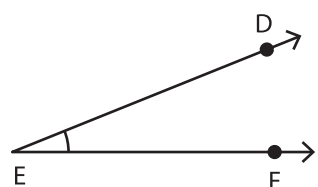
[www.mathworksheets4kids.com](http://www.mathworksheets4kids.com)



Vertex: \_\_\_\_\_


Arms: \_\_\_\_\_

7)



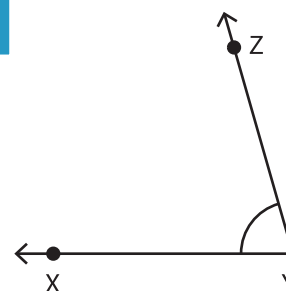
Vertex: \_\_\_\_\_

Arms: \_\_\_\_\_



Vertex: \_\_\_\_\_

Arms: \_\_\_\_\_



Vertex: \_\_\_\_\_

Arms: \_\_\_\_\_