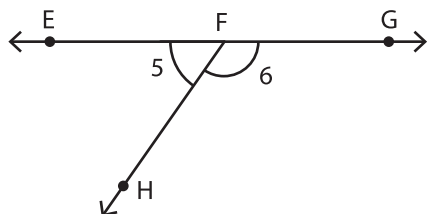


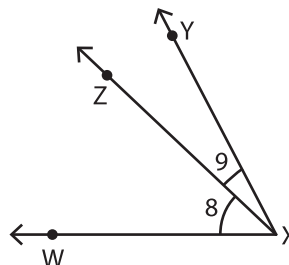
Recognizing the Parts of an Angle

Write the vertex and arms of the indicated angles.

1)



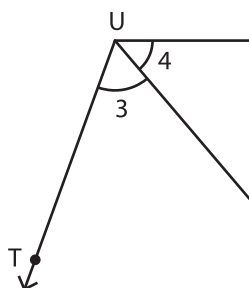
2)



Vertex of $\angle 5$: _____

Arms of $\angle 6$: _____

3)



Vertex of $\angle 4$: _____

Arms of $\angle 3$: _____

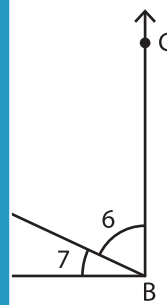
PREVIEW

Gain complete access to the largest collection of worksheets in all subjects!

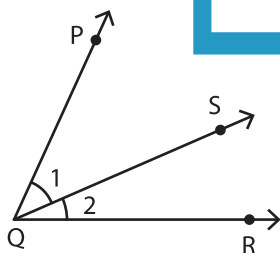
Members, please log in to download this worksheet.

Not a member? Please sign up to gain complete access.

www.mathworksheets4kids.com

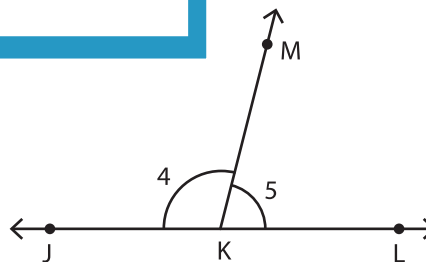


5)



Vertex of $\angle 1$: _____

Arms of $\angle 2$: _____



Vertex of $\angle 5$: _____

Arms of $\angle 4$: _____