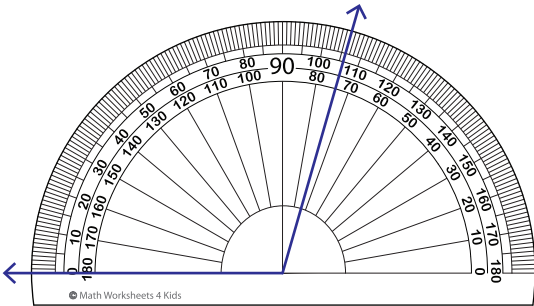


Reading a Protractor - Match

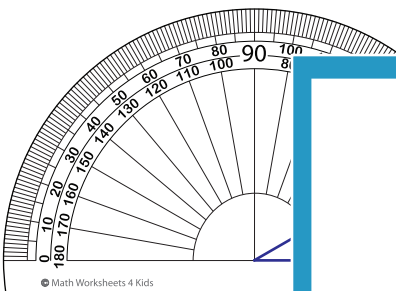
Read the protractor and match the angle to its corresponding measures.

1)



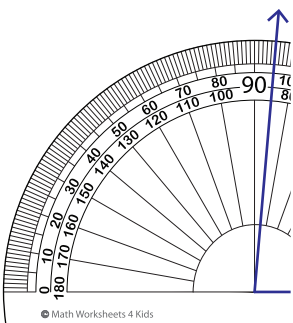
30°

2)



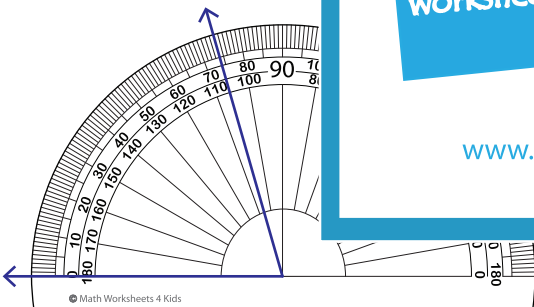
85°

3)



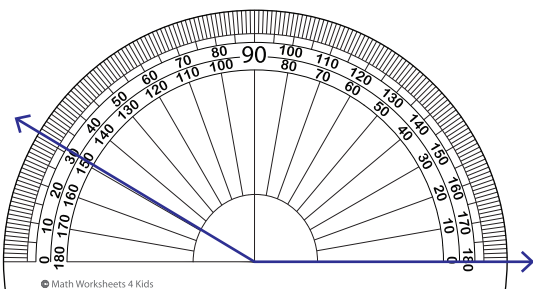
149°

4)



106°

5)



74°

PREVIEW

Gain complete access to the largest collection of worksheets in all subjects!

Members, please log in to download this worksheet.

Not a member? Please sign up to gain complete access.

www.mathworksheets4kids.com