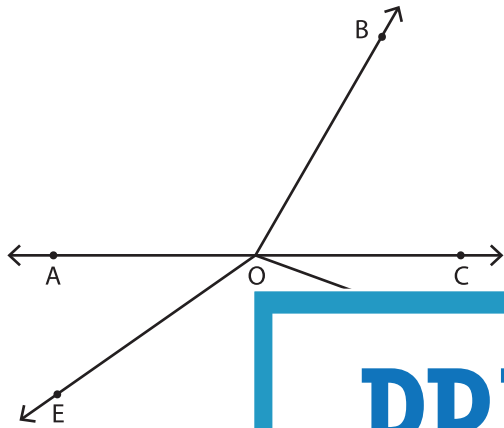


Name : _____

Angles on a Straight Line

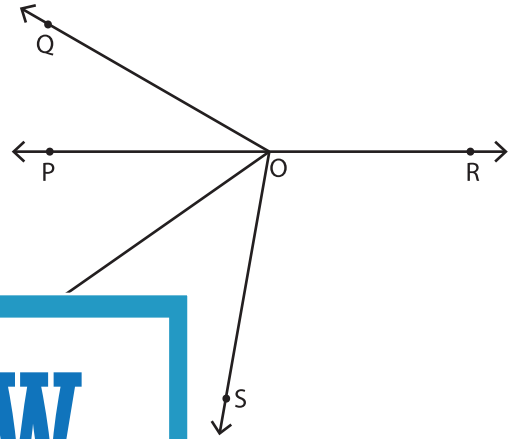
Find the measure of the specified angles.

1)



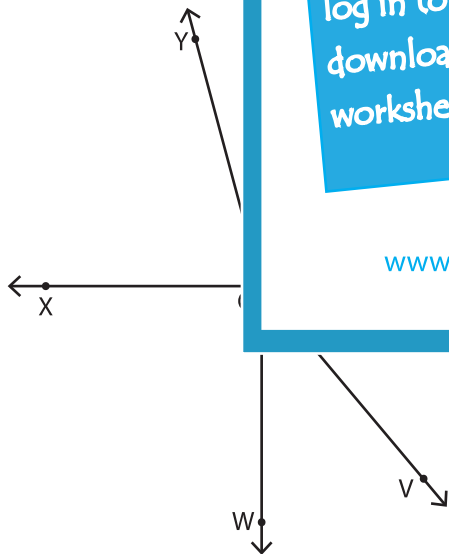
$m\angle BOC = 60^\circ$
 $m\angle DOE = 125^\circ$
 $m\angle AOD = 160^\circ$

2)

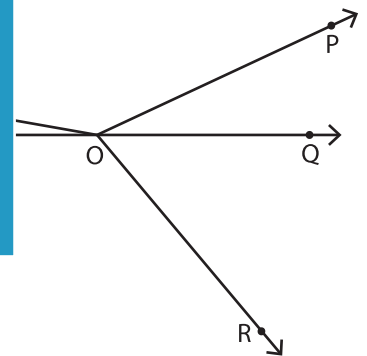


$m\angle TOS = \underline{\hspace{2cm}}$
 $m\angle POS = \underline{\hspace{2cm}}$
 $m\angle QOT = \underline{\hspace{2cm}}$

3)



$m\angle XOY = 130^\circ$
 $m\angle YOZ = 105^\circ$
 $m\angle WOV = 40^\circ$
 $m\angle WOX = \underline{\hspace{2cm}}$
 $m\angle XOY = \underline{\hspace{2cm}}$
 $m\angle ZOV = \underline{\hspace{2cm}}$



$m\angle POQ = 25^\circ$
 $m\angle ROM = 130^\circ$
 $m\angle NOQ = 170^\circ$
 $m\angle QOR = \underline{\hspace{2cm}}$
 $m\angle MON = \underline{\hspace{2cm}}$
 $m\angle POM = \underline{\hspace{2cm}}$

PREVIEW

Gain complete access to the largest collection of worksheets in all subjects!

Members, please log in to download this worksheet.

Not a member? Please sign up to gain complete access.

www.mathworksheets4kids.com