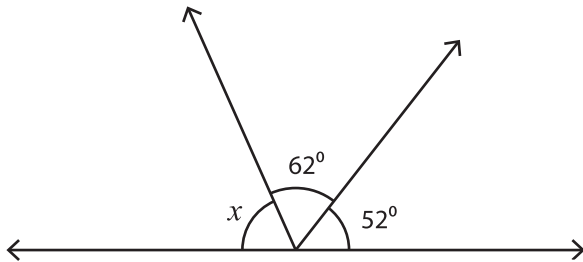


Name : \_\_\_\_\_

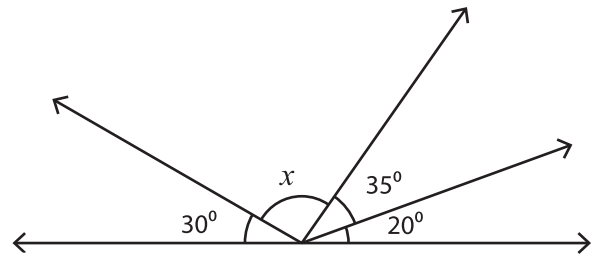
# Angles on a Straight Line

Find the size of each missing angle.

1)



2)



$x =$  \_\_\_\_\_

# PREVIEW

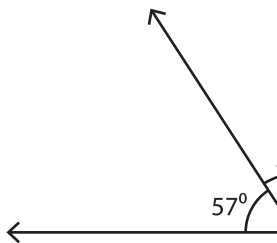
Gain complete access to the largest collection of worksheets in all subjects!

Members, please log in to download this worksheet.

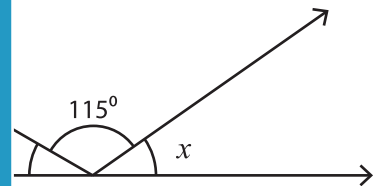
Not a member? Please sign up to gain complete access.

[www.mathworksheets4kids.com](http://www.mathworksheets4kids.com)

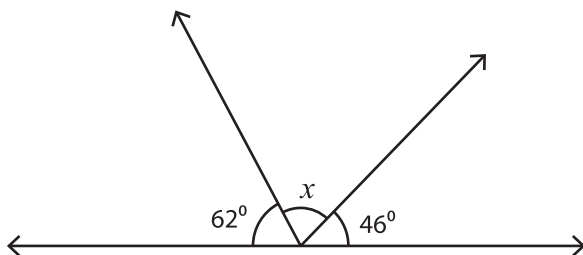
3)



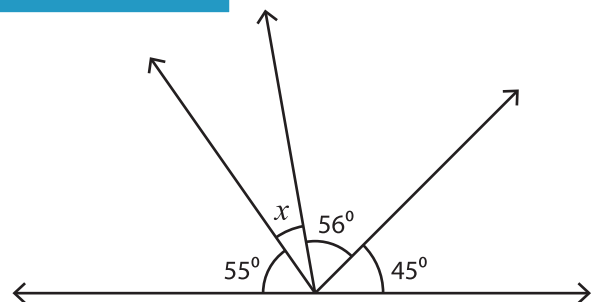
$x =$  \_\_\_\_\_



5)



$x =$  \_\_\_\_\_



$x =$  \_\_\_\_\_