

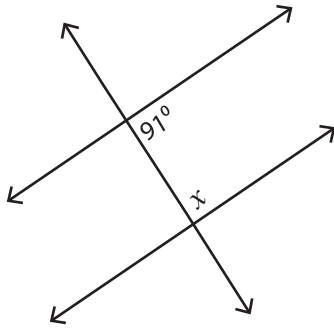
Name : \_\_\_\_\_

# Interior and Exterior Angles

ES1

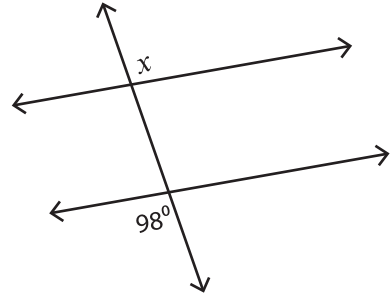
Find the value of each indicated angle.

1)



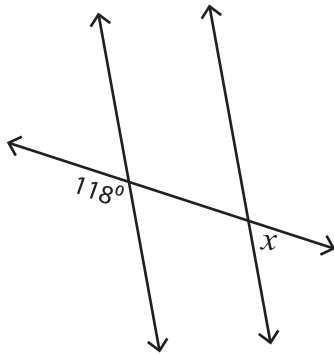
$x =$  \_\_\_\_\_

2)



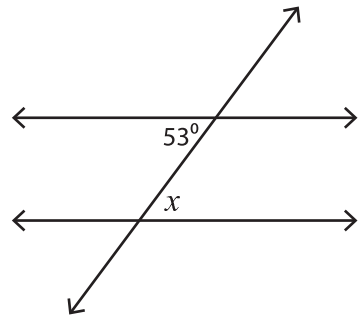
$x =$  \_\_\_\_\_

3)



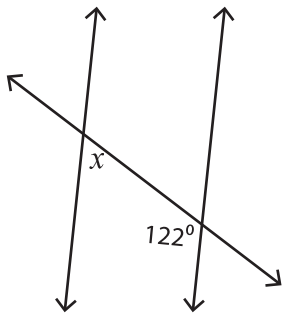
$x =$  \_\_\_\_\_

4)



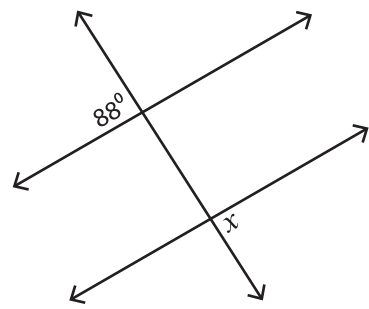
$x =$  \_\_\_\_\_

5)



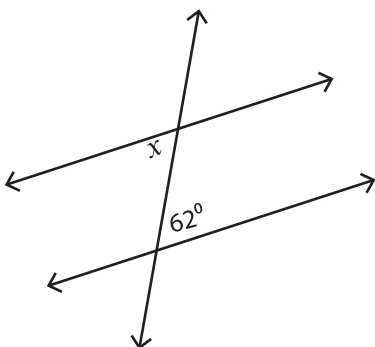
$x =$  \_\_\_\_\_

6)



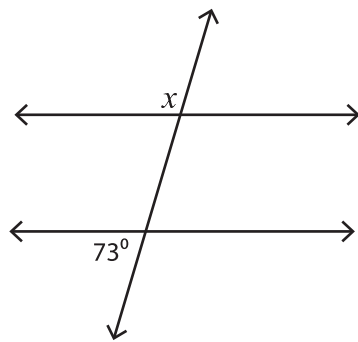
$x =$  \_\_\_\_\_

7)



$x =$  \_\_\_\_\_

8)



$x =$  \_\_\_\_\_