

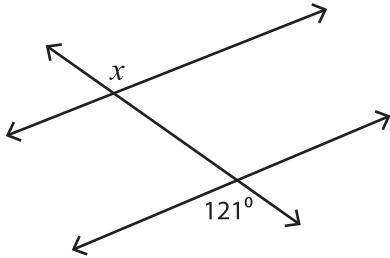
Name : _____

Interior and Exterior Angles

ES2

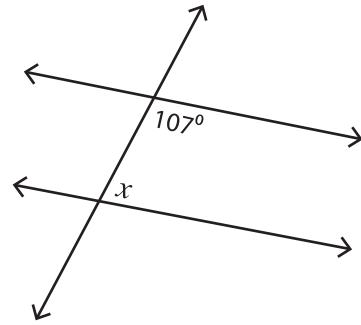
Find the value of each indicated angle.

1)



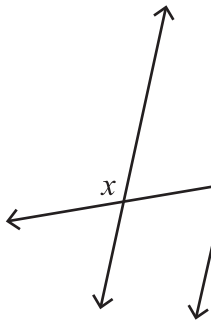
$x =$ _____

2)



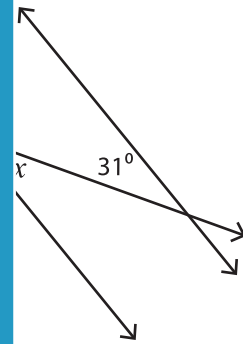
$x =$ _____

3)

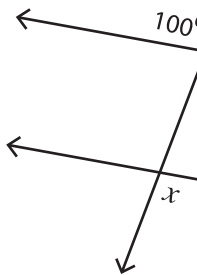


$x =$ _____

PREVIEW
Gain complete access to the largest collection of worksheets in all subjects!



5)

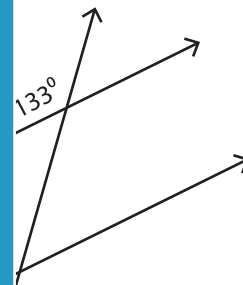


$x =$ _____

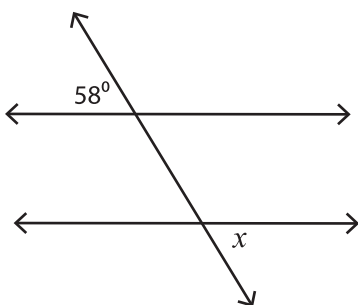
Members, please log in to download this worksheet.

Not a member? Please sign up to gain complete access.

www.mathworksheets4kids.com

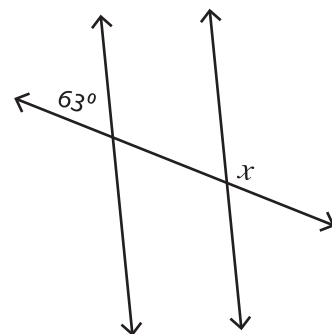


7)



$x =$ _____

8)



$x =$ _____