

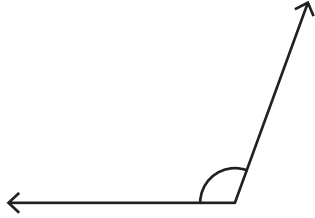
Name : \_\_\_\_\_

## Identifying the Types of Angles

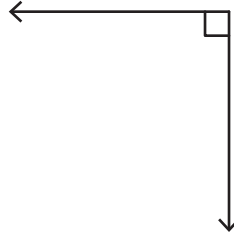
T1S2

Identify each angle as acute, right, obtuse, straight, or reflex.

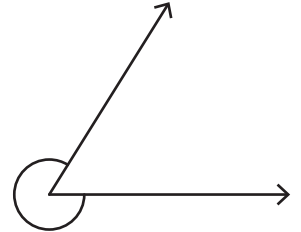
1)



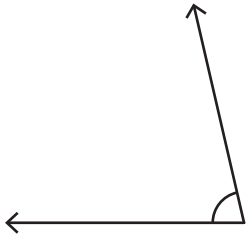
2)



3)

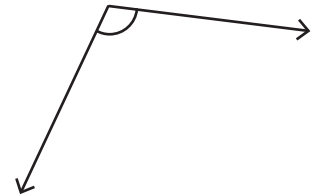


4)

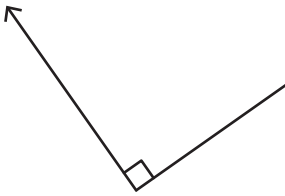


**PREVIEW**

Gain complete access to the largest collection of worksheets in all subjects!



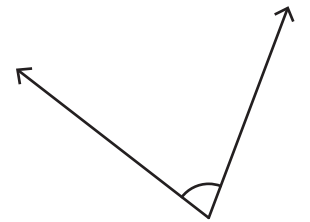
7)



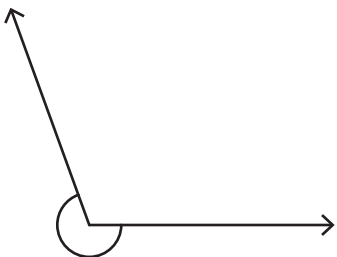
Members, please log in to download this worksheet.

Not a member? Please sign up to gain complete access.

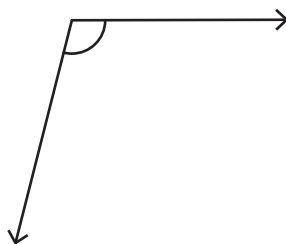
[www.mathworksheets4kids.com](http://www.mathworksheets4kids.com)



10)



11)



12)

