

Name : _____

Identifying the Types of Angles

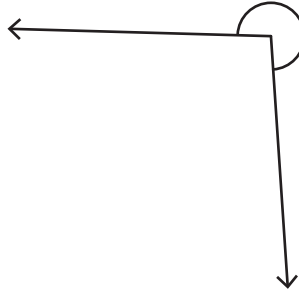
T1S5

Identify each angle as acute, right, obtuse, straight, or reflex.

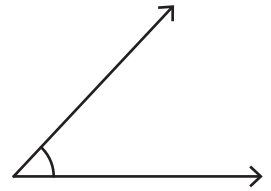
1)



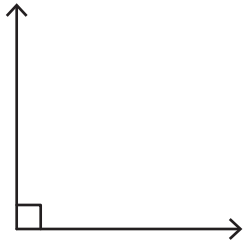
2)



3)



4)

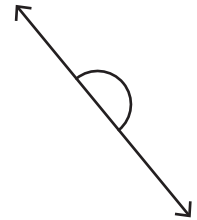


PREVIEW
Gain complete access to the largest
collection of worksheets in all subjects!

Members, please
log in to
download this
worksheet.

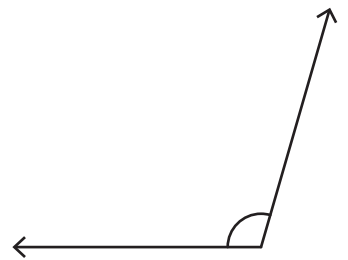
Not a member?
Please sign up to
gain complete
access.

www.mathworksheets4kids.com

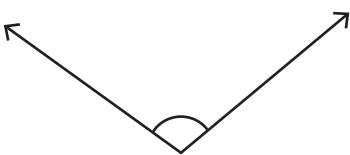


7)

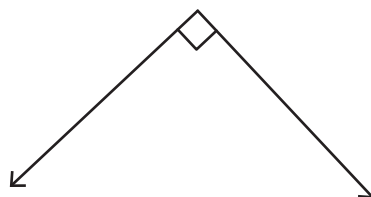




10)



11)



12)

