

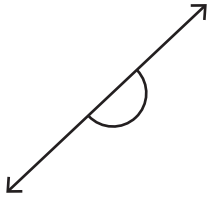
Name : _____

T2S2

Identifying the Types of Angles

A) Identify each angle as acute, right, obtuse, straight, or reflex.

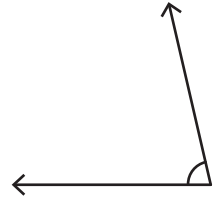
1)



2)



3)

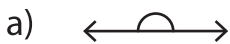


B) Identify the type of angle.

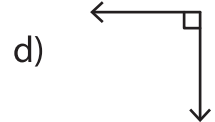
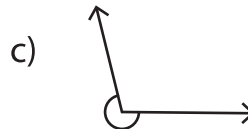
1) 23°

3) 161°

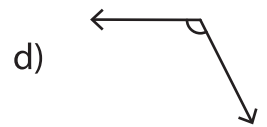
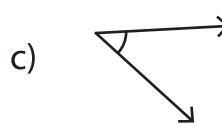
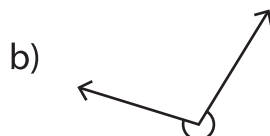
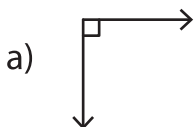
C) 1) Which of the following is a straight angle?



2) Which of the following is an acute angle?



3) Which of the following is an acute angle?



PREVIEW

Gain complete access to the largest collection of worksheets in all subjects!

Members, please log in to download this worksheet.

Not a member? Please sign up to gain complete access.

www.mathworksheets4kids.com