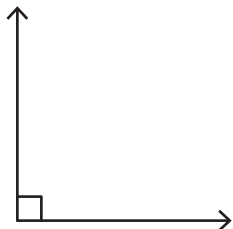


Name : _____

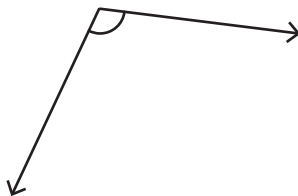
Identifying the Types of Angles

A) Identify each angle as acute, right, obtuse, straight, or reflex.

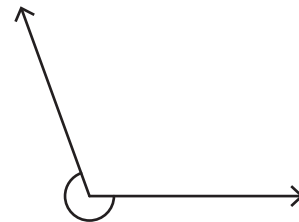
1)



2)



3)



B) Identify the type of angle.

1) 99°

3) 194°

PREVIEW

Gain complete access to the largest collection of worksheets in all subjects!

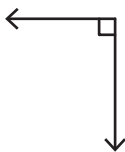
Members, please log in to download this worksheet.

Not a member? Please sign up to gain complete access.

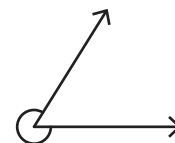
www.mathworksheets4kids.com

C) 1) Which of the following is a right angle?

a)




d)



2) Which of the following is an obtuse angle?

a)



b)



c)



d)

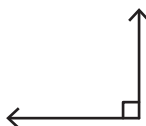


3) Which of the following is an obtuse angle?

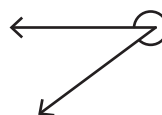
a)



b)



c)



d)

