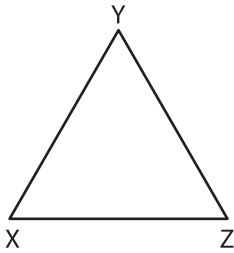


Types of Angles - Shapes

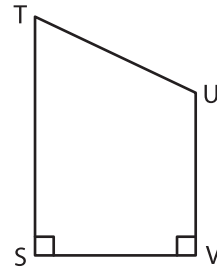
Identify the type of each indicated angle.

1)



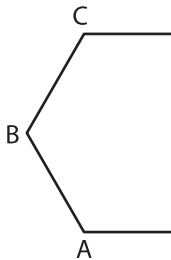
$\angle XYZ$: _____

2)

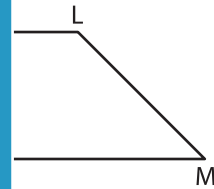


$\angle UVS$: _____

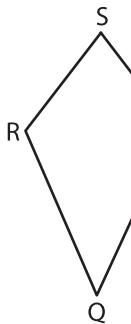
3)



$\angle CDE$: _____



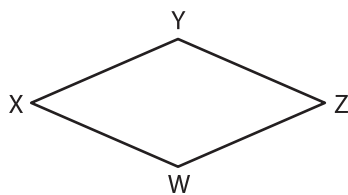
5)



$\angle RST$: _____

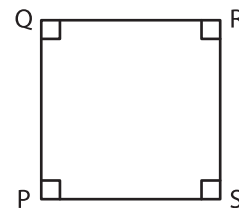


7)



$\angle XWZ$: _____

8)



$\angle PSR$: _____

PREVIEW

Gain complete access to the largest collection of worksheets in all subjects!

Members, please log in to download this worksheet.

Not a member? Please sign up to gain complete access.

www.mathworksheets4kids.com