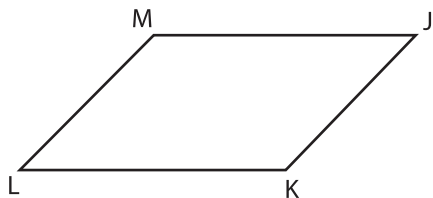


# Types of Angles - Shapes

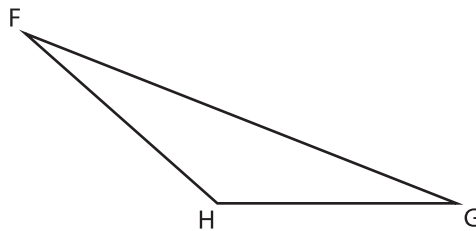
Identify the type of each indicated angle.

1)



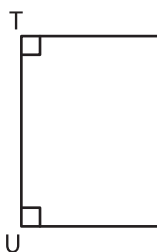
$\angle KJM$ : \_\_\_\_\_

2)

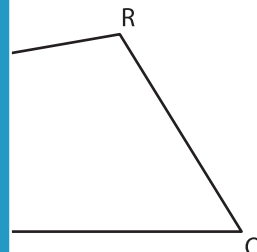


$\angle FHG$ : \_\_\_\_\_

3)

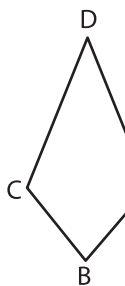


$\angle VWT$ : \_\_\_\_\_

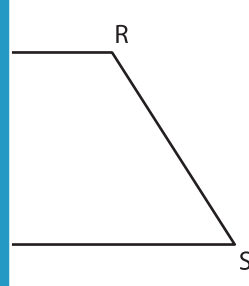


\_\_\_\_\_

5)



$\angle CDA$ : \_\_\_\_\_



\_\_\_\_\_

## PREVIEW

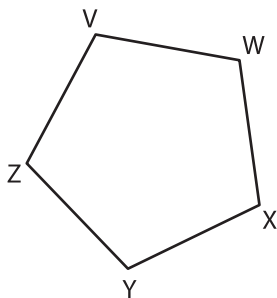
Gain complete access to the largest collection of worksheets in all subjects!

Members, please log in to download this worksheet.

Not a member? Please sign up to gain complete access.

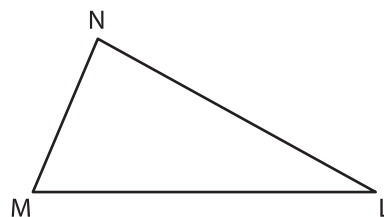
[www.mathworksheets4kids.com](http://www.mathworksheets4kids.com)

7)



$\angle XYZ$ : \_\_\_\_\_

8)



$\angle MLN$ : \_\_\_\_\_