

Name : \_\_\_\_\_

# Types of Angles - Revision

T1S2

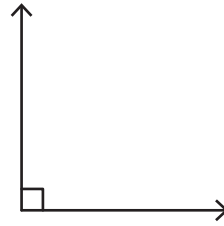
A) Identify each angle as acute, right, obtuse, straight, or reflex.

1)



\_\_\_\_\_

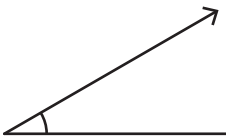
2)



\_\_\_\_\_

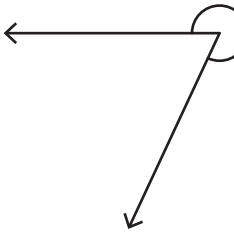
B) 1) Which of the following is an acute angle?

a)



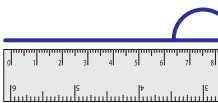
2) Which of the following

a)



C) Identify the type of each

1)



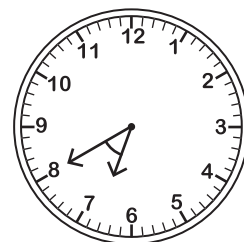
\_\_\_\_\_

2)



\_\_\_\_\_

2)



\_\_\_\_\_

**PREVIEW**

Gain complete access to the largest collection of worksheets in all subjects!

Members, please log in to download this worksheet.

Not a member? Please sign up to gain complete access.

[www.mathworksheets4kids.com](http://www.mathworksheets4kids.com)

of angle formed by the clock.

