

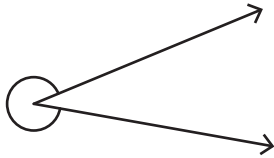
Name : _____

Types of Angles - Revision

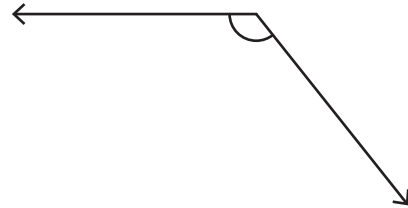
T1S4

A) Identify each angle as acute, right, obtuse, straight, or reflex.

1)



2)



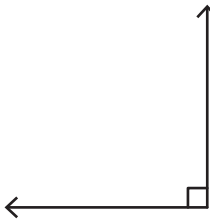
B) 1) Which of the following is an obtuse angle?

a)



2) Which of the following is a right angle?

a)

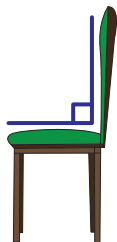


C) Identify the type of each angle.

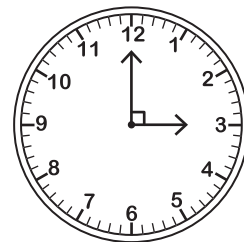
1)



2)



2)



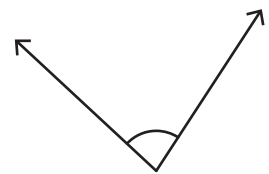
PREVIEW

Gain complete access to the largest collection of worksheets in all subjects!

Members, please log in to download this worksheet.

Not a member? Please sign up to gain complete access.

www.mathworksheets4kids.com



of angle formed by the clock.

