

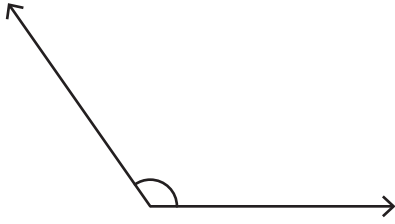
Name : \_\_\_\_\_

## Types of Angles - Revision


T1S5

A) Identify each angle as acute, right, obtuse, straight, or reflex.

1)

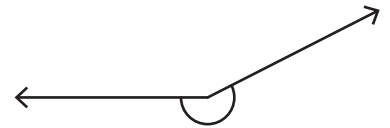
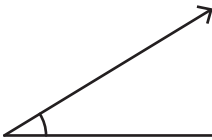


2)



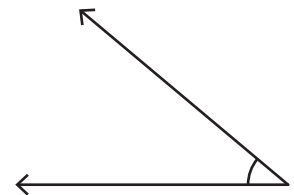

B) 1) Which of the following is a reflex angle?

a)



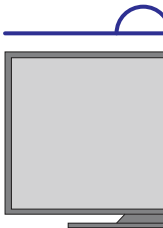
2) Which of the following

a)




C) Identify the type of each


1)



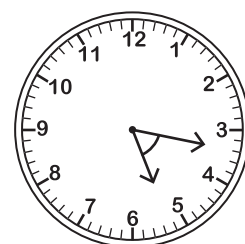
of angle formed by the  
clock.



2)



2)



**PREVIEW**

Gain complete access to the largest collection of worksheets in all subjects!

Members, please log in to download this worksheet.

Not a member? Please sign up to gain complete access.

[www.mathworksheets4kids.com](http://www.mathworksheets4kids.com)