

Name : _____

Types of Angles - Revision

T2S3

A) Identify each angle as acute, right, obtuse, straight, or reflex.

1) 46°

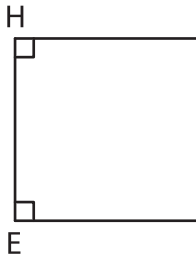
2) 189°

3) 200°

4) 95°

B) Identify the type of each indicated angle.

1)



$\angle EFG$: _____




PREVIEW


Gain complete access to the largest collection of worksheets in all subjects!

C) Draw the arm by joining

1)



_____ as acute, right, or obtuse.



Members, please log in to download this worksheet.

Not a member? Please sign up to gain complete access.

www.mathworksheets4kids.com

D) Draw the angles.

1) An acute angle

2) A straight angle