

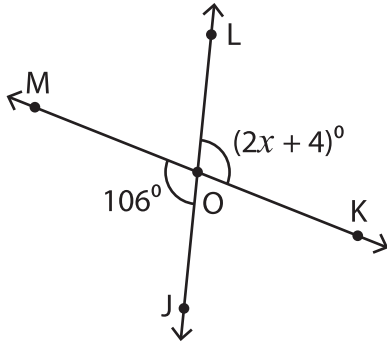
Name : _____

Vertical Angles

Two-Step: S3

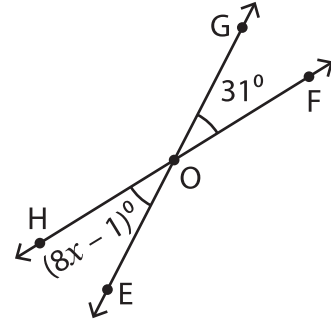
Find the value of x .

1)



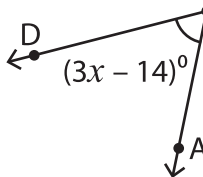
$x =$ _____, m

2)

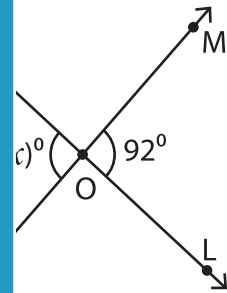


$m\angle EOF =$ _____

3)

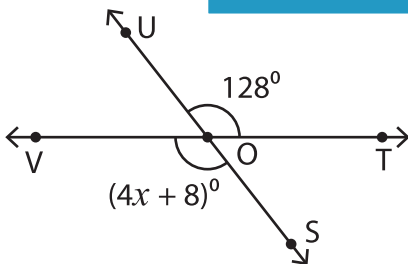


$x =$ _____, m

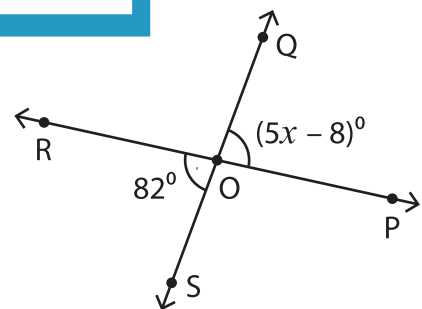


$m\angle KOL =$ _____

5)



$x =$ _____, $m\angle TOS =$ _____



$x =$ _____, $m\angle SOP =$ _____

PREVIEW

Gain complete access to the largest collection of worksheets in all subjects!

Members, please log in to download this worksheet.

Not a member? Please sign up to gain complete access.

www.mathworksheets4kids.com