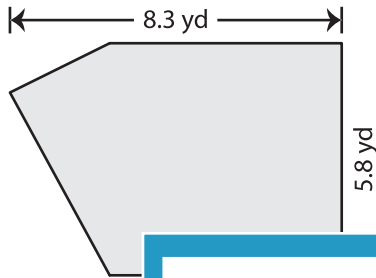


Name : \_\_\_\_\_

# Area - Compound Shapes

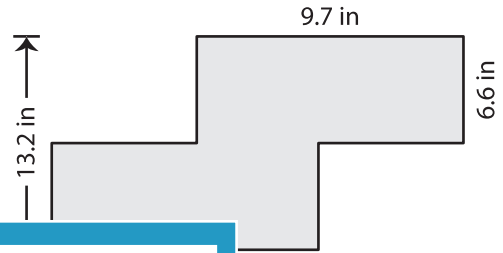
Find the area of each figure. Round your answer to 2 decimal places if required.  
(Use  $\pi = 3.14$ )

1)



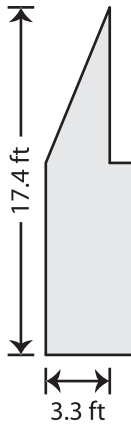
Area = \_\_\_\_\_

2)



Area = \_\_\_\_\_

3)



Area = \_\_\_\_\_

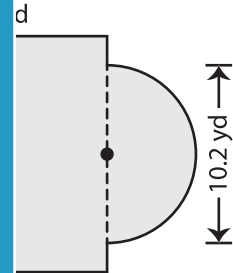
## PREVIEW

Gain complete access to the largest collection of worksheets in all subjects!

Members, please log in to download this worksheet.

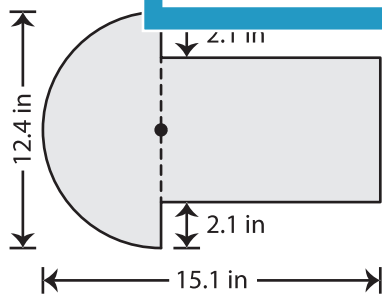
Not a member? Please sign up to gain complete access.

www.mathworksheets4kids.com

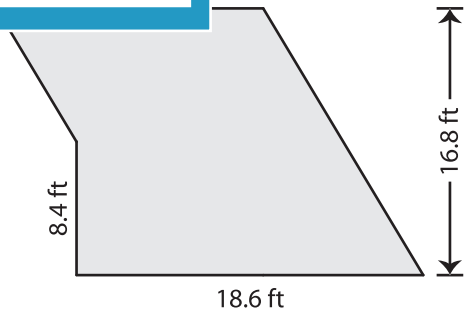


Area = \_\_\_\_\_

5)



Area = \_\_\_\_\_



Area = \_\_\_\_\_