

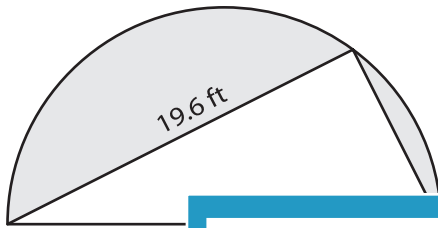
Name : _____

Area - Compound Shapes

L153

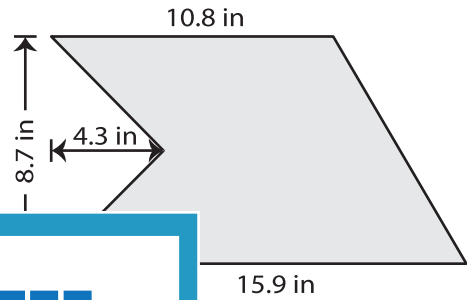
Find the area of the shaded region in each figure. Round your answer to 2 decimal places if required. (Use $\pi = 3.14$)

1)



Area = _____

2)



3)



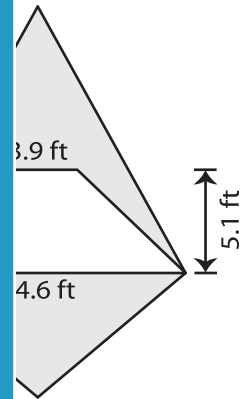
Area = _____

PREVIEW
Gain complete access to the largest collection of worksheets in all subjects!

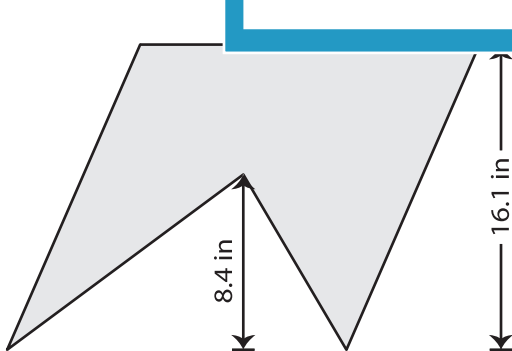
Members, please log in to download this worksheet.

Not a member? Please sign up to gain complete access.

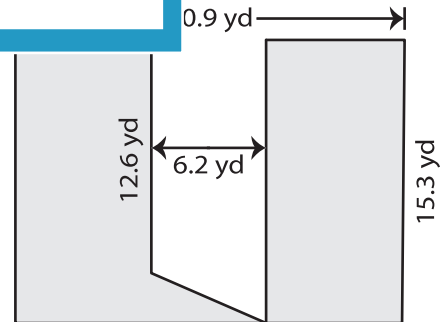
www.mathworksheets4kids.com



5)



Area = _____



Area = _____