
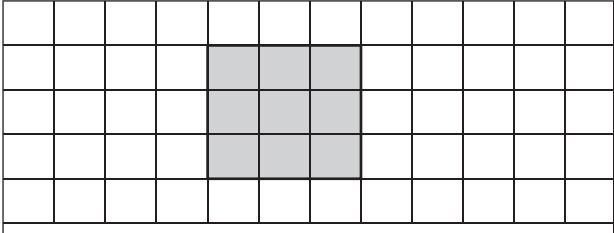
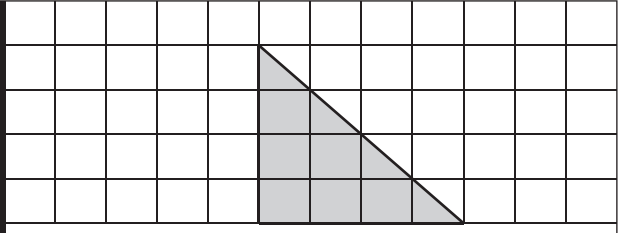


Comparing Area

 = 1 ft²

Find the area of the shapes in each grid. Fill in the box with appropriate symbol <, > or = in each problem.

1)

	
Area = <input style="width: 50px;" type="text"/>	Area = <input style="width: 50px;" type="text"/>

Area of Square Area of Triangle

2)

	
Area = <input style="width: 50px;" type="text"/>	Area = <input style="width: 50px;" type="text"/>

PREVIEW

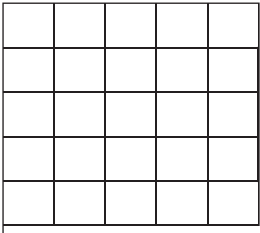

Gain complete access to the largest collection of worksheets in all subjects!

Members, please log in to download this worksheet.

Not a member? Please sign up to gain complete access.

www.mathworksheets4kids.com

3)

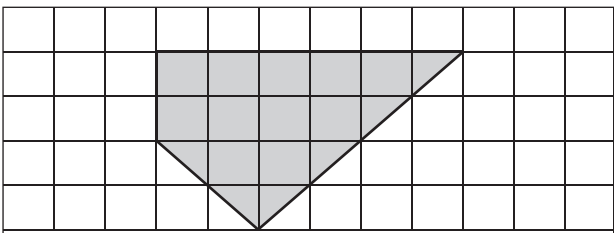
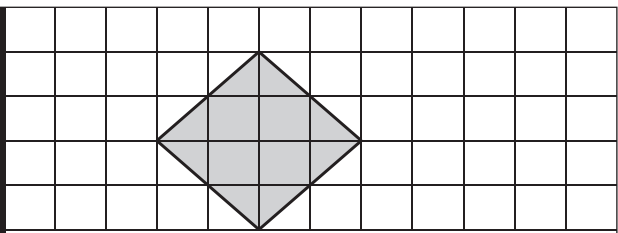
	
Area = <input style="width: 50px;" type="text"/>	Area = <input style="width: 50px;" type="text"/>

4)

	
Area = <input style="width: 50px;" type="text"/>	Area = <input style="width: 50px;" type="text"/>

Area of Trapezoid Area of Pentagon

5)

	
Area = <input style="width: 50px;" type="text"/>	Area = <input style="width: 50px;" type="text"/>

Area of Quadrilateral Area of Rhombus