
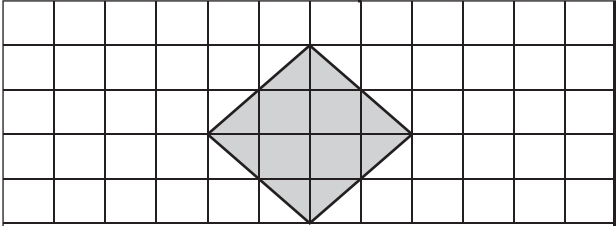
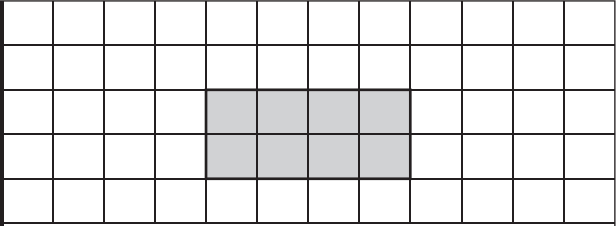


Comparing Area

 = 1 in²

Find the area of the shapes in each grid. Fill in the box with appropriate symbol <, > or = in each problem.

1)

 <p style="text-align: center;">Area = <input style="width: 50px;" type="text"/></p>	 <p style="text-align: center;">Area = <input style="width: 50px;" type="text"/></p>
-----------------------------------------------------------------------------------------------------------------------------------------------------------------------	------------------------------------------------------------------------------------------------------------------------------------------------------------------------

Area of Rhombus Area of Rectangle

2)

 <p style="text-align: center;">Area = <input style="width: 50px;" type="text"/></p>	 <p style="text-align: center;">Area = <input style="width: 50px;" type="text"/></p>
-----------------------------------------------------------------------------------------------------------------------------------------------------------------------	------------------------------------------------------------------------------------------------------------------------------------------------------------------------

PREVIEW

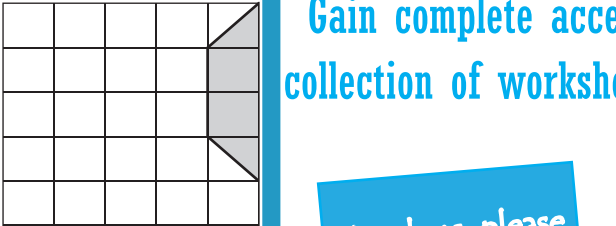
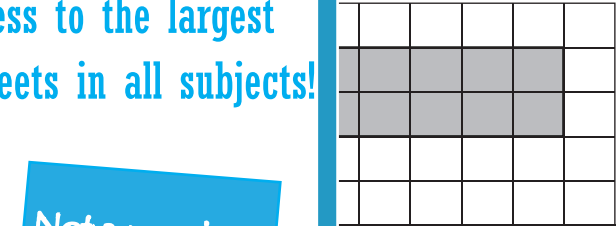
Gain complete access to the largest collection of worksheets in all subjects!

Members, please log in to download this worksheet.

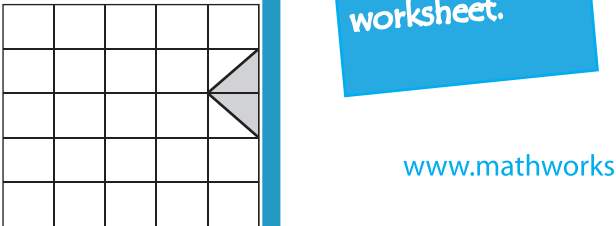
Not a member? Please sign up to gain complete access.

www.mathworksheets4kids.com

3)


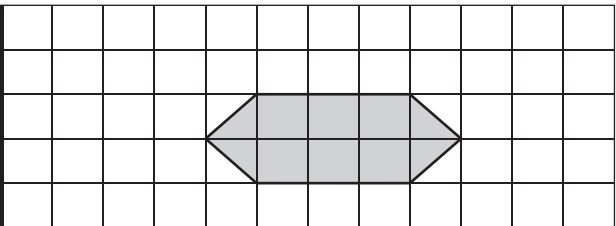
 <p style="text-align: center;">Area = <input style="width: 50px;" type="text"/></p>	 <p style="text-align: center;">Area = <input style="width: 50px;" type="text"/></p>
-------------------------------------------------------------------------------------------------------------------------------------------------------------------------	--------------------------------------------------------------------------------------------------------------------------------------------------------------------------

4)

 <p style="text-align: center;">Area = <input style="width: 50px;" type="text"/></p>	 <p style="text-align: center;">Area = <input style="width: 50px;" type="text"/></p>
-------------------------------------------------------------------------------------------------------------------------------------------------------------------------	--------------------------------------------------------------------------------------------------------------------------------------------------------------------------

Area of Pentagon Area of Quadrilateral

5)

 <p style="text-align: center;">Area = <input style="width: 50px;" type="text"/></p>	 <p style="text-align: center;">Area = <input style="width: 50px;" type="text"/></p>
-------------------------------------------------------------------------------------------------------------------------------------------------------------------------	--------------------------------------------------------------------------------------------------------------------------------------------------------------------------

Area of Square Area of Pentagon