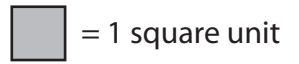



# Drawing Shapes




Draw any shape in each grid with the following area.


1) Area = 16 square units



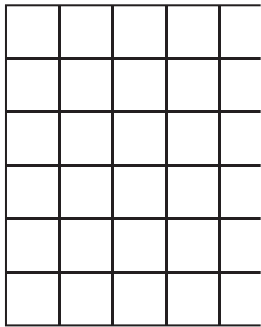
2) Area = 30 square units



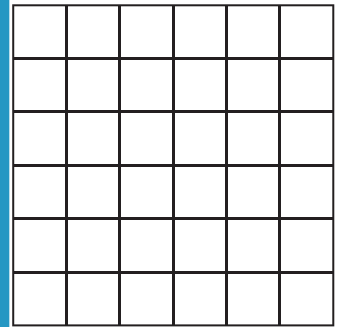
3) Area = 23 square units




4) Area = 11 square units



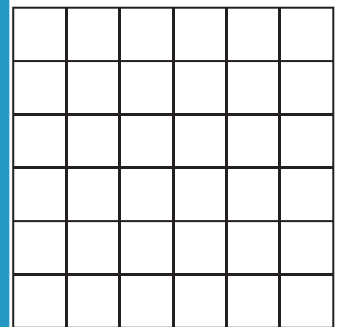
Area = 18 square units



7) Area = 12 square units



Area = 21 square units



## PREVIEW

Gain complete access to the largest collection of worksheets in all subjects!


Members, please  
log in to  
download this  
worksheet.

Not a member?  
Please sign up to  
gain complete  
access.


[www.mathworksheets4kids.com](http://www.mathworksheets4kids.com)

Draw 3 different shapes each with an area of 14 square units.

10)



11)



12)

