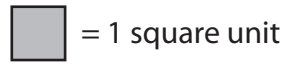



Drawing Shapes




Draw any shape in each grid with the following area.


1) Area = 34 square units




2) Area = 24 square units



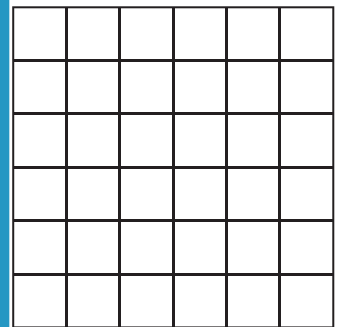
3) Area = 18 square units




4) Area = 27 square units



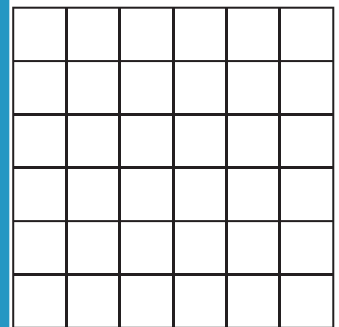
Area = 35 square units



7) Area = 36 square units



Area = 28 square units



PREVIEW

Gain complete access to the largest collection of worksheets in all subjects!


Members, please
log in to
download this
worksheet.

Not a member?
Please sign up to
gain complete
access.


www.mathworksheets4kids.com

Draw 3 different shapes each with an area of 12 square units.

10)



11)



12)

