


Name : _____


Counting Squares

L1S2

 = 1 ft²


Find the area of each shape by counting the squares.

1)




Area = _____

2)




Area = _____

3)



Area = _____

4)



Area = _____


PREVIEW

Gain complete access to the largest collection of worksheets in all subjects!

Members, please log in to download this worksheet.


Not a member? Please sign up to gain complete access.

www.mathworksheets4kids.com




Area = _____

7)




Area = _____




Area = _____

10)




Area = _____

11)



Area = _____

12)



Area = _____