


Name : \_\_\_\_\_


# Counting Squares

L154

 = 1 in<sup>2</sup>

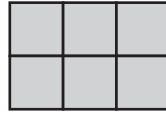
Find the area of each shape by counting the squares.

1)



Area = \_\_\_\_\_

2)




Area = \_\_\_\_\_

3)



Area = \_\_\_\_\_

4)



Area = \_\_\_\_\_

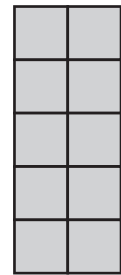
**PREVIEW**

Gain complete access to the largest collection of worksheets in all subjects!

Members, please log in to download this worksheet.


Not a member? Please sign up to gain complete access.

[www.mathworksheets4kids.com](http://www.mathworksheets4kids.com)




Area = \_\_\_\_\_

7)

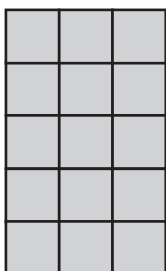


Area = \_\_\_\_\_




Area = \_\_\_\_\_

10)




Area = \_\_\_\_\_

11)



Area = \_\_\_\_\_

12)



Area = \_\_\_\_\_