

Name : \_\_\_\_\_


# Counting Squares

L2S5

Find the area of each shape by counting the squares.

1)


Scale :  =  $5 \text{ in}^2$



Area = \_\_\_\_\_

2)


Scale :  =  $3 \text{ ft}^2$



Area = \_\_\_\_\_

3)

Scale :  =  $2 \text{ yd}^2$



Area = \_\_\_\_\_

4)

Scale :  = \_\_\_\_\_



Area = \_\_\_\_\_

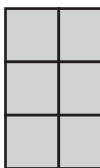
Scale :  =  $3 \text{ ft}^2$



Area = \_\_\_\_\_


7)

Scale :  = \_\_\_\_\_



Area = \_\_\_\_\_


Scale :  =  $5 \text{ in}^2$



Area = \_\_\_\_\_

10)


Scale :  =  $3 \text{ in}^2$



Area = \_\_\_\_\_

11)

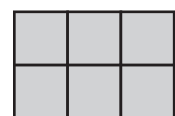
Scale :  =  $5 \text{ ft}^2$



Area = \_\_\_\_\_

12)

Scale :  =  $2 \text{ yd}^2$



Area = \_\_\_\_\_

# PREVIEW

Gain complete access to the largest collection of worksheets in all subjects!

Members, please log in to download this worksheet.

Not a member? Please sign up to gain complete access.

[www.mathworksheets4kids.com](http://www.mathworksheets4kids.com)