


Name : \_\_\_\_\_


L2S1

# Counting Squares

Find the area of each shape.

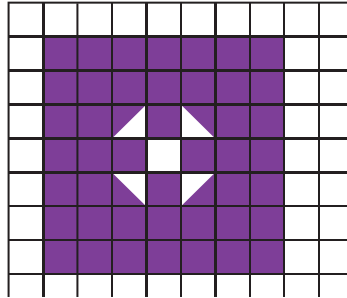
 = 1 square unit

1)

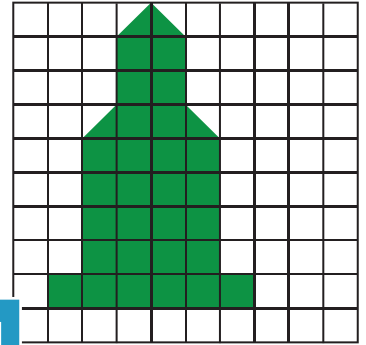


Area =  square units

2)




3)



Area =  square units

4)



Area =  square units

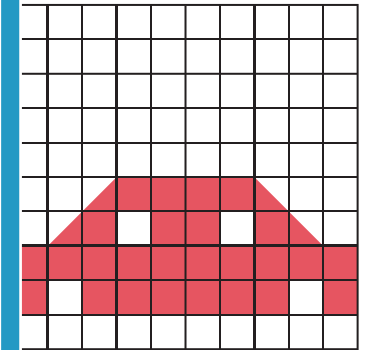
**PREVIEW**

Gain complete access to the largest collection of worksheets in all subjects!

Members, please log in to download this worksheet.

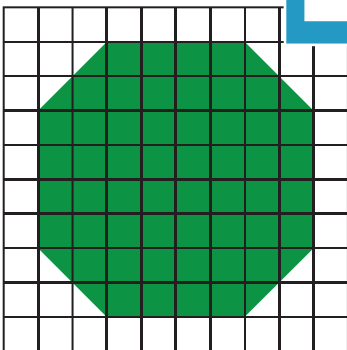
Not a member? Please sign up to gain complete access.

[www.mathworksheets4kids.com](http://www.mathworksheets4kids.com)




Area =  square units

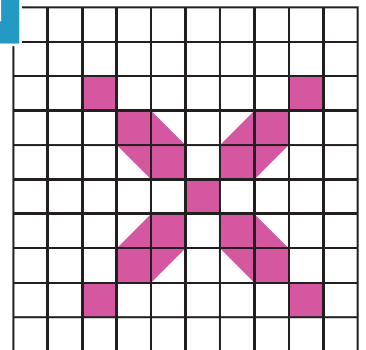
7)



Area =  square units



Area =  square units



Area =  square units