

Name : _____

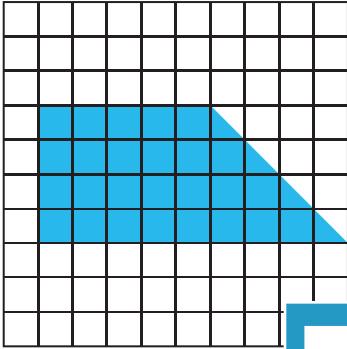
L2S5

Counting Squares

Find the area of each shape.

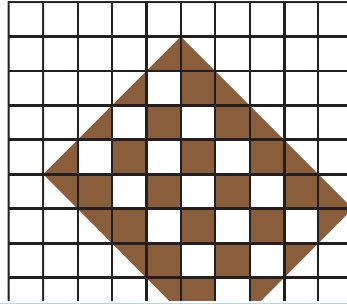
 = 1 square unit

1)

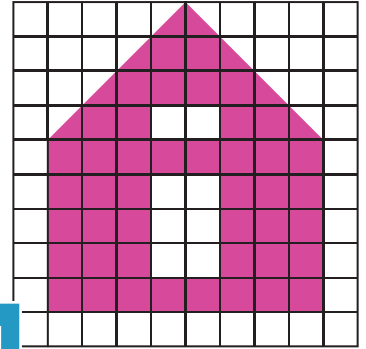


Area = square units

2)

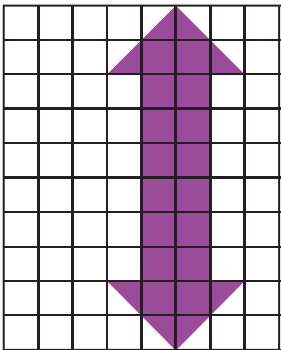


3)



Area = square units

4)




Area = square units

PREVIEW
Gain complete access to the largest collection of worksheets in all subjects!

Members, please log in to download this worksheet.

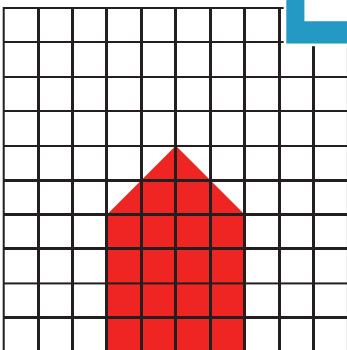
Not a member? Please sign up to gain complete access.

www.mathworksheets4kids.com

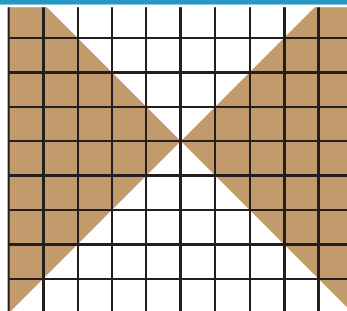


Area = square units

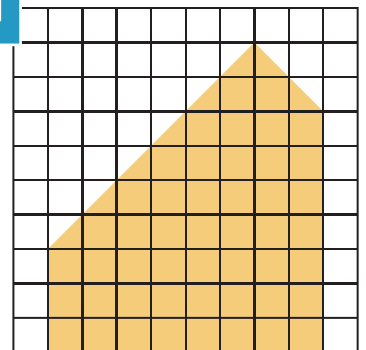
7)



Area = square units



Area = square units



Area = square units