

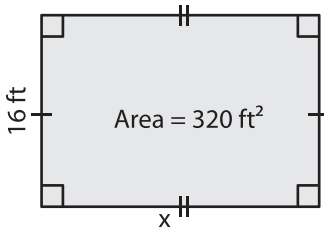
Name : \_\_\_\_\_

## Area – Mixed Shapes

Sheet 1

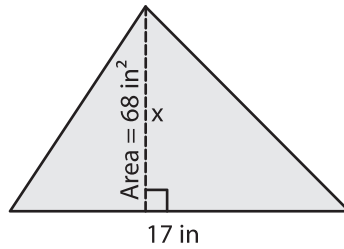
Find  $x$ . (Use  $\pi = 3.14$ )

1)



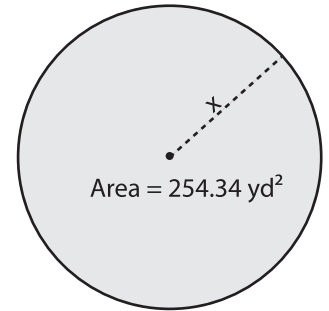
$x =$  \_\_\_\_\_

2)

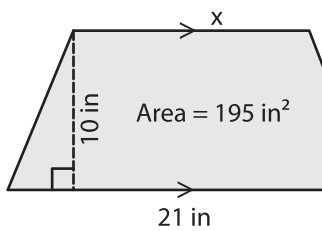


$x =$  \_\_\_\_\_

3)



4)



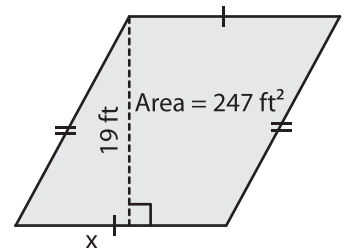
$x =$  \_\_\_\_\_

**PREVIEW**  
Gain complete access to the largest collection of worksheets in all subjects!

Members, please log in to download this worksheet.

Not a member? Please sign up to gain complete access.

[www.mathworksheets4kids.com](http://www.mathworksheets4kids.com)



$x =$  \_\_\_\_\_

7) The length of a rectangle is \_\_\_\_\_

and the width is 276 square yards.

8) The area of a triangle is 182 square feet. Determine the height, if the base of the triangle is 26 feet.

\_\_\_\_\_