

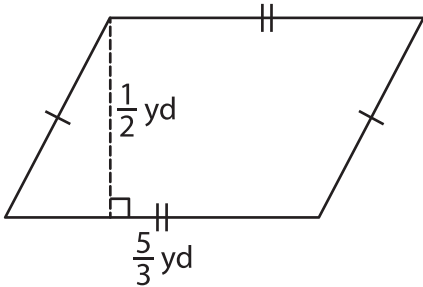
Name : _____

Area – Mixed Shapes

L1S1

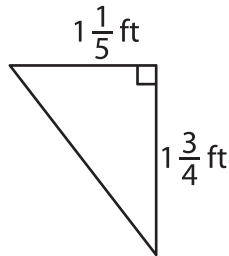
Find the area of each shape.

1)



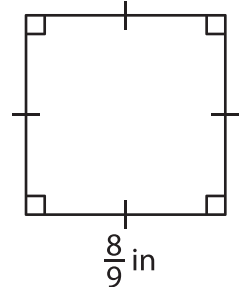
Area = _____

2)



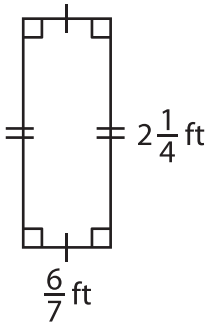
Area = _____

3)



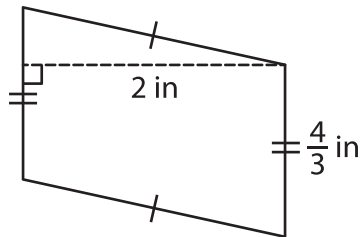
Area = _____

4)



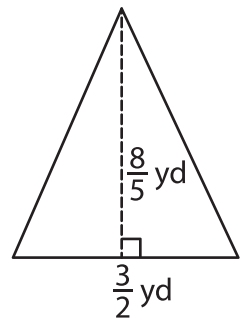
Area = _____

5)



Area = _____

6)



Area = _____

7) If the side of a square measures $\frac{3}{5}$ foot, find the area of the square.

8) Determine the area of a rectangle, if the width and length of the rectangle are $\frac{4}{9}$ yard and $\frac{6}{7}$ yard respectively.
