

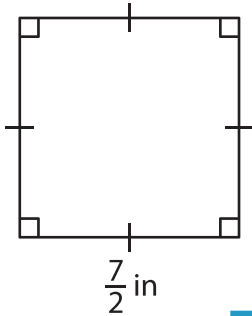
Name : \_\_\_\_\_

## Area – Mixed Shapes

L1S2

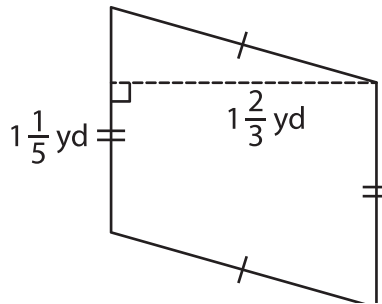
Find the area of each shape.

1)

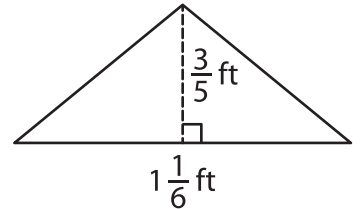


Area = \_\_\_\_\_

2)

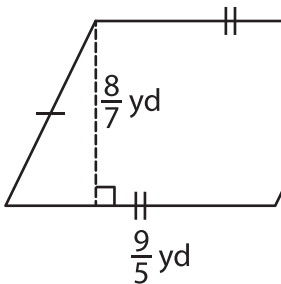


3)



Area = \_\_\_\_\_

4)



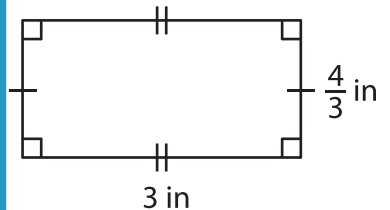
Area = \_\_\_\_\_

**PREVIEW**  
Gain complete access to the largest collection of worksheets in all subjects!

Members, please log in to download this worksheet.

Not a member? Please sign up to gain complete access.

[www.mathworksheets4kids.com](http://www.mathworksheets4kids.com)



Area = \_\_\_\_\_

7) The length and width of a rectangle are \_\_\_\_\_ and \_\_\_\_\_ respectively. What is the area of the rectangle?

\_\_\_\_\_ y. What is the area of the rectangle?

8) The base and height of a triangle are  $\frac{1}{5}$  inch and  $\frac{5}{7}$  inch respectively. Find the area of the triangle.