

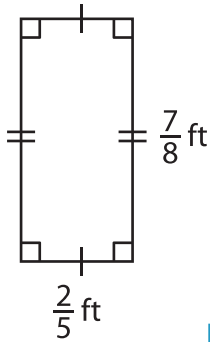
Name : _____

Area – Mixed Shapes

L1S3

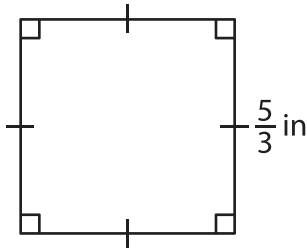
Find the area of each shape.

1)



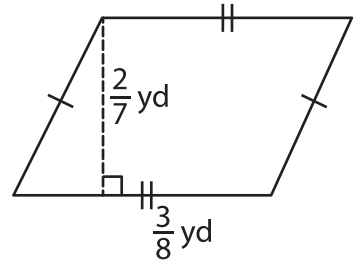
Area = _____

2)

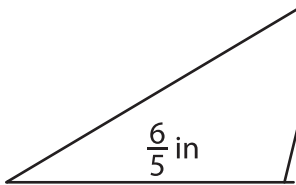


Area = _____

3)



4)



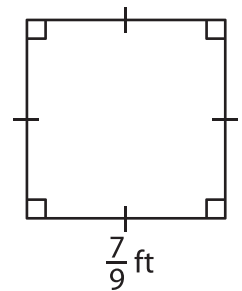
Area = _____

PREVIEW
Gain complete access to the largest collection of worksheets in all subjects!

Members, please log in to download this worksheet.

Not a member? Please sign up to gain complete access.

www.mathworksheets4kids.com



Area = _____

7) Find the area of the trapezoid.

8) Determine the area of a parallelogram, if the base and height of the parallelogram are $2\frac{1}{2}$ feet and $2\frac{1}{3}$ feet.
