

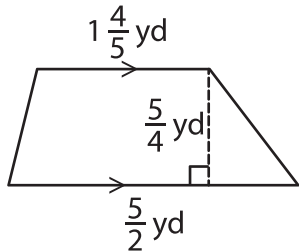
Name : _____

Area – Mixed Shapes

L2S2

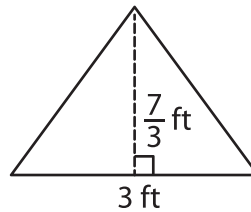
Find the area of each shape. (Use $\pi = \frac{22}{7}$)

1)



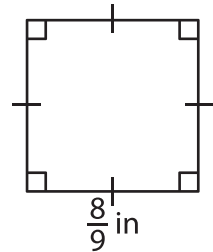
Area = _____

2)

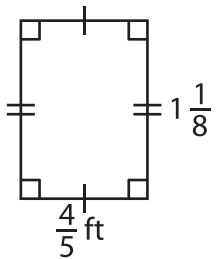


Area = _____

3)



4)



Area = _____

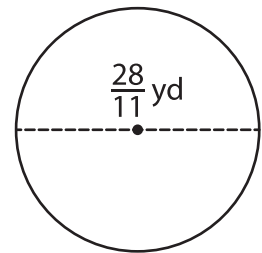
PREVIEW

Gain complete access to the largest collection of worksheets in all subjects!

Members, please log in to download this worksheet.

Not a member? Please sign up to gain complete access.

www.mathworksheets4kids.com



Area = _____

7) What is the area of the

8) The side of a square measures $\frac{4}{5}$ yard. Find the area of the square.
