

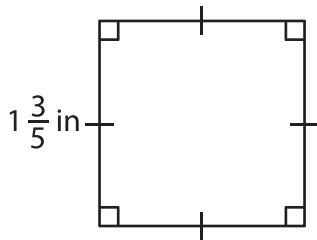
Name : _____

Area – Mixed Shapes

L2S3

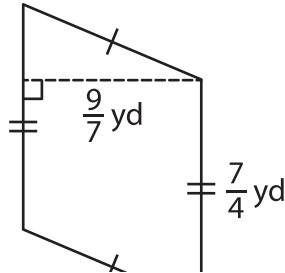
Find the area of each shape. (Use $\pi = \frac{22}{7}$)

1)

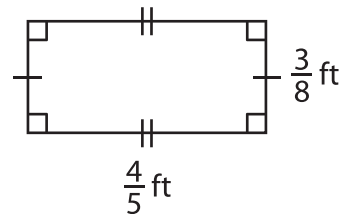


Area = _____

2)

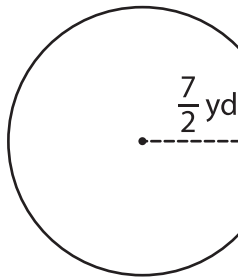


3)



Area = _____

4)



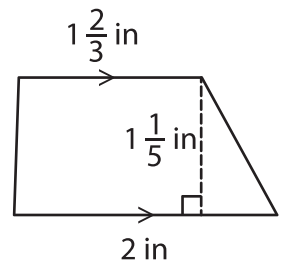
Area = _____

Gain complete access to the largest collection of worksheets in all subjects!

Members, please log in to download this worksheet.

Not a member? Please sign up to gain complete access.

www.mathworksheets4kids.com



Area = _____

7) The parallel bases of a trapezoid are 3 1/2 feet and 5 feet. The perpendicular distance between the bases is $\frac{5}{7}$ foot, find the area.

8) Determine the area of a circle that has a radius of $\frac{1}{2}$ inch.
