

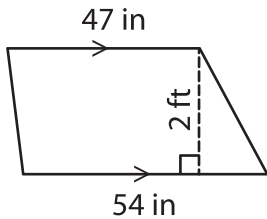
Name : _____

Area – Mixed Shapes

Sheet 2

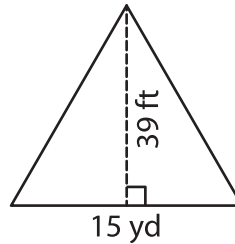
Find the area of each shape.

1)

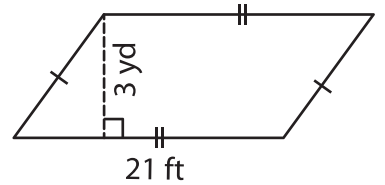


Area = _____ in

2)

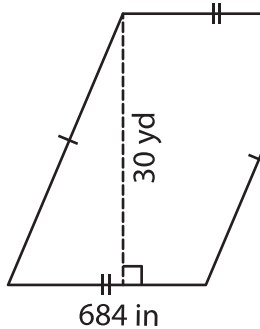


3)



Area = _____ ft²

4)



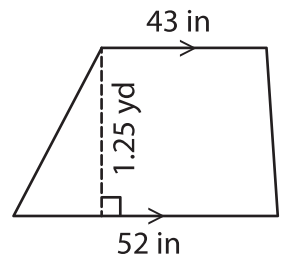
Area = _____ yd

Gain complete access to the largest collection of worksheets in all subjects!

Members, please log in to download this worksheet.

Not a member? Please sign up to gain complete access.

www.mathworksheets4kids.com



Area = _____ in²

7) Find the area of the rectangle. The length and width are 11 yards respectively.

The length and width of the rectangle are 38 feet and

8) The height of a triangle is 18 inches. What is the area of the triangle in square yards, if the base is 2 yards?