

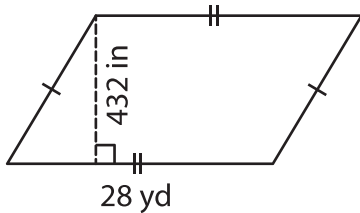
Name : _____

Area – Mixed Shapes

Sheet 3

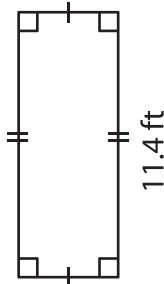
Find the area of each shape.

1)



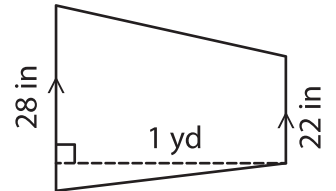
Area = _____ yd

2)

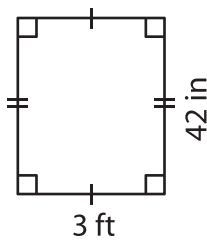


Area = _____ in²

3)



4)



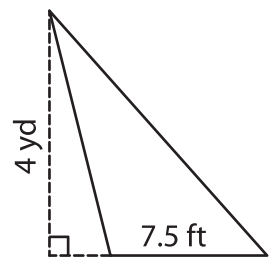
Area = _____ ft

PREVIEW
Gain complete access to the largest
collection of worksheets in all subjects!

Members, please
log in to
download this
worksheet.

Not a member?
Please sign up to
gain complete
access.

www.mathworksheets4kids.com



Area = _____ yd²

7) The base and height of a triangle in square inches are 12 and 15 respectively. Determine the area of the triangle.

Determine the area of the

8) The height and base of a parallelogram are 12 yards and 39 feet respectively. Find the area of the parallelogram in square feet.