

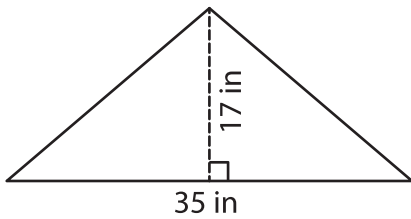
Name : _____

Area – Mixed Shapes

L1S1

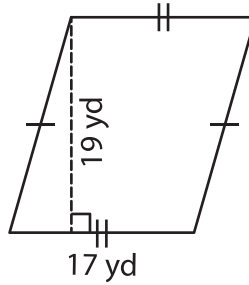
Find the area of each shape.

1)



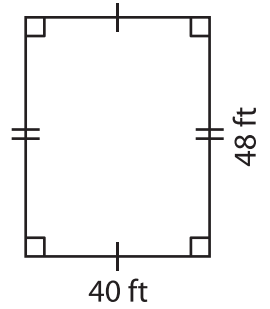
Area = _____

2)



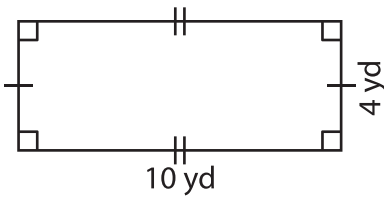
Area = _____

3)



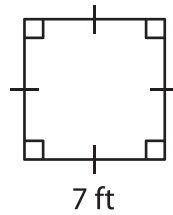
Area = _____

4)



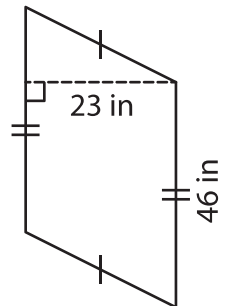
Area = _____

5)



Area = _____

6)



Area = _____

7) The side of a square measures 45 yards. What is the area of the square?

8) Find the area of the triangle whose base is 32 inches and height is 16 inches.
