

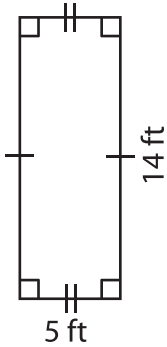
Name : \_\_\_\_\_

## Area – Mixed Shapes

L1S2

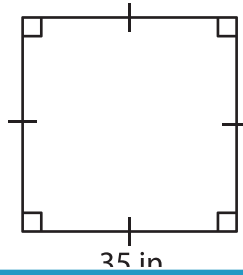
Find the area of each shape.

1)



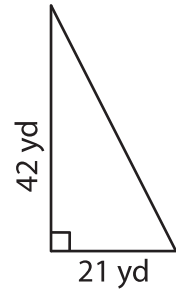
Area = \_\_\_\_\_

2)



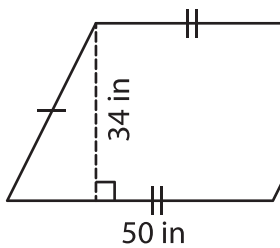
Area = \_\_\_\_\_

3)



Area = \_\_\_\_\_

4)



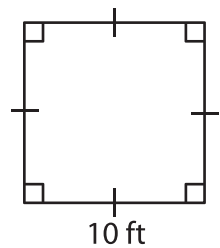
Area = \_\_\_\_\_

Gain complete access to the largest collection of worksheets in all subjects!

Members, please log in to download this worksheet.

Not a member? Please sign up to gain complete access.

[www.mathworksheets4kids.com](http://www.mathworksheets4kids.com)



Area = \_\_\_\_\_

7) The base and height of

Find the area of the triangle.

8) Determine the area of a parallelogram, if the base and height of the parallelogram are 38 feet and 9 feet respectively.