

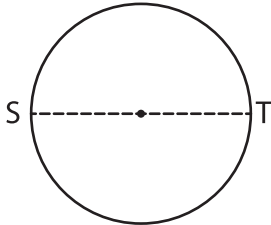
Name : \_\_\_\_\_

## Area – Mixed Shapes

L3S1

Find the area of each shape. (Use  $\pi = 3.14$ )

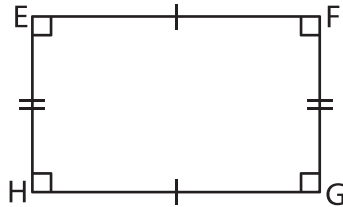
1)



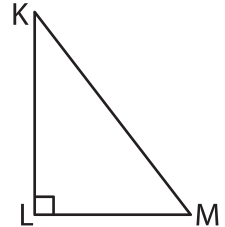
ST = 16 in

Area = \_\_\_\_\_

2)



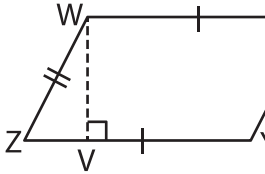
3)



KL = 13 ft ; LM = 9 ft

Area = \_\_\_\_\_

4)



VW = 6 ft ; YZ = 11 ft

Area = \_\_\_\_\_

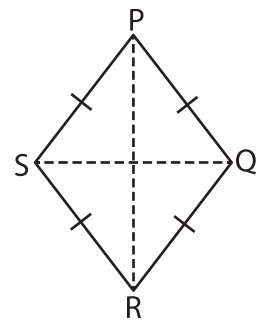
**PREVIEW**

Gain complete access to the largest collection of worksheets in all subjects!

Members, please log in to download this worksheet.

Not a member? Please sign up to gain complete access.

[www.mathworksheets4kids.com](http://www.mathworksheets4kids.com)



PR = 16 yd ; QS = 10 yd

Area = \_\_\_\_\_

7) The sum of the bases  
area of the trapezoid.

\_\_\_\_\_ is respectively. Find the

8) If the side of a square measures 12 inches, determine the area of the square.