

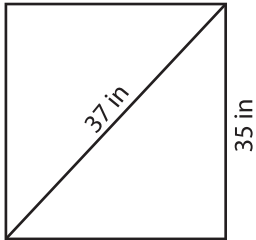
Name : \_\_\_\_\_

## Area of a Rectangle

Sheet 5

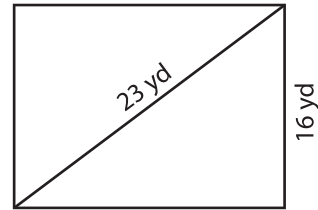
A) Find the area of each rectangle for the given measurements. Round your answer to two decimal places.

1)



Area = \_\_\_\_\_

2)



Area = \_\_\_\_\_

3) The length of the diagonal of a rectangle is 40 feet. Find the area of the rectangle, if the length is 36 feet.

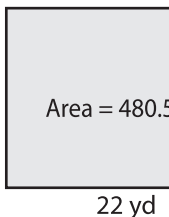
\_\_\_\_\_

4) Determine the area of a rectangle that has a length of 12 inches and has a width of 7 inches.

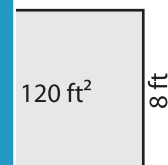
\_\_\_\_\_

B) Find the length of the diagonal of a rectangle that has an area of 480.5 square yards. Round your answer to the nearest tenth.

1)



Diagonal = \_\_\_\_\_



\_\_\_\_\_

3) The width of a rectangle is 9 inches. If it has an area of 119.06 square inches, find the length of the diagonal.

\_\_\_\_\_

4) The area of a rectangle is 137.7 square yards. Determine the length of the diagonal, if the rectangle has a length of 21 yards.

\_\_\_\_\_

**PREVIEW**

Gain complete access to the largest collection of worksheets in all subjects!

Members, please log in to download this worksheet.

Not a member? Please sign up to gain complete access.

[www.mathworksheets4kids.com](http://www.mathworksheets4kids.com)