

Name : _____

Area of a Rectangle

Sheet 2

A) Find the missing side length of each rectangle.

1) Area = 9.45 yd^2 , width = 2.1 yd

2) Area = 130.56 ft^2 , length = 12.8 ft

length = _____

width = _____

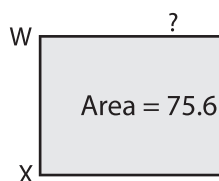
3) Area = 365.16 ft^2 , length = 20.4 ft

4) Area = 24.42 in^2 , width = 3.7 in

width = _____

B) Find the missing side

5)



PREVIEW
Gain complete access to the largest collection of worksheets in all subjects!

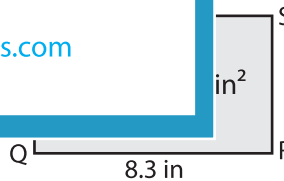
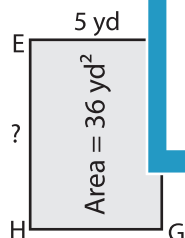
Members, please log in to download this worksheet.

Not a member? Please sign up to gain complete access.

www.mathworksheets4kids.com

14.8 ft

7)



9) The area of a rectangle is 167.68 square yards. If the length is 13.1 yards, determine the width of the rectangle.