

Name : _____

Area of a Rectangle

Sheet 1

A) Find the missing side length of each rectangle.

1) Area = 150 in^2 , width = 10 in

length = _____

2) Area = 18 yd^2 , length = 6 yd

width = _____

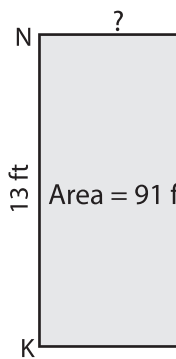
3) Area = 55 yd^2 , length = 11 yd

width = _____

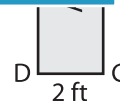
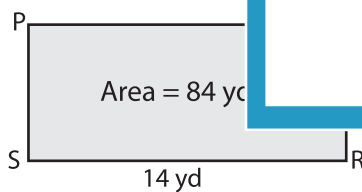
4) Area = 72 ft^2 , width = 8 ft

B) Find the missing side

5)



7)



9) The area of a rectangle is 132 square inches. If the length is 22 inches, determine the width of the rectangle.

PREVIEW

Gain complete access to the largest collection of worksheets in all subjects!

Members, please log in to download this worksheet.

Not a member? Please sign up to gain complete access.

www.mathworksheets4kids.com