

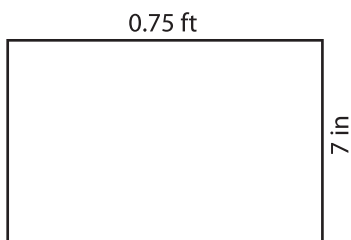
Name : _____

T152

Area of a Rectangle

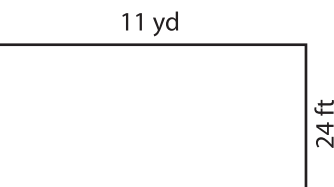
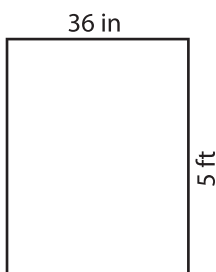
Find the area of each rectangle.

1)



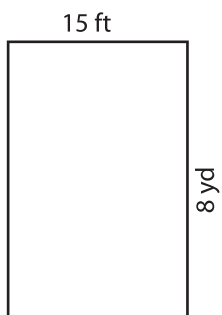
Area = _____ in

2)



= _____ yd²

4)



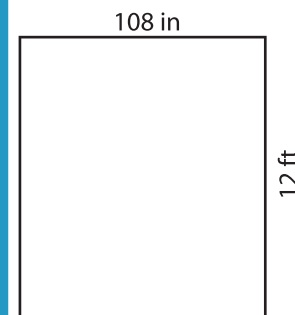
Area = _____ y

PREVIEW
Gain complete access to the largest collection of worksheets in all subjects!

Members, please log in to download this worksheet.

Not a member? Please sign up to gain complete access.

www.mathworksheets4kids.com

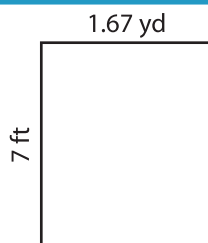


= _____ ft²

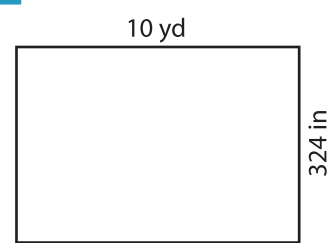
7)



Area = _____ in²



Area = _____ ft²



Area = _____ yd²