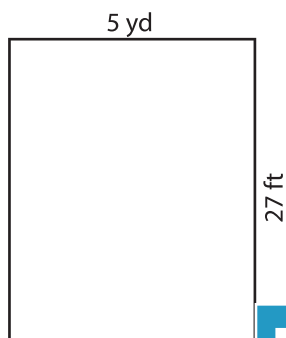


Name : \_\_\_\_\_

# Area of a Rectangle

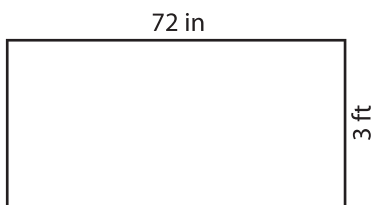
Find the area of each rectangle.

1)



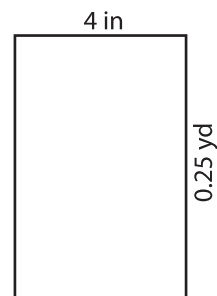
Area = \_\_\_\_\_ y

2)

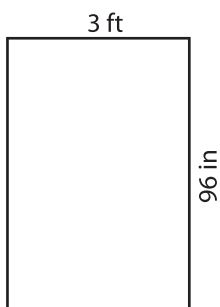


= \_\_\_\_\_ in<sup>2</sup>

3)



4)



Area = \_\_\_\_\_ in

Gain complete access to the largest collection of worksheets in all subjects!

Members, please log in to download this worksheet.

Not a member? Please sign up to gain complete access.

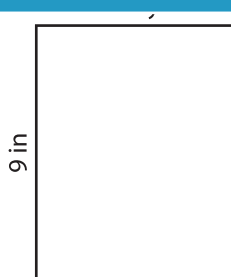
[www.mathworksheets4kids.com](http://www.mathworksheets4kids.com)

= \_\_\_\_\_ ft<sup>2</sup>

7)



Area = \_\_\_\_\_ yd<sup>2</sup>



Area = \_\_\_\_\_ in<sup>2</sup>



Area = \_\_\_\_\_ ft<sup>2</sup>