


Name : _____

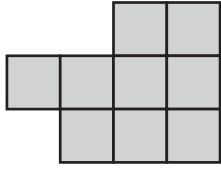
Counting Squares

L154

 = 1 ft²

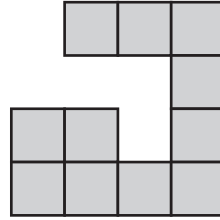
Find the area of each shape by counting the squares.

1)



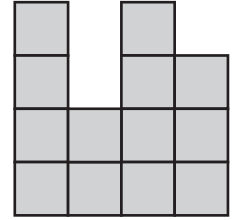
Area = ft²

2)




Area = ft²

3)



Area = ft²

4)



Area = ft²

5)

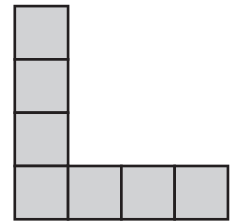
PREVIEW

Gain complete access to the largest collection of worksheets in all subjects!

Members, please log in to download this worksheet.

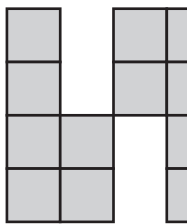
Not a member? Please sign up to gain complete access.

www.mathworksheets4kids.com



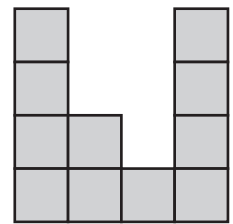
Area = ft²

7)



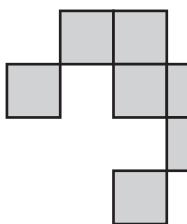
Area = ft²

6)



Area = ft²

10)

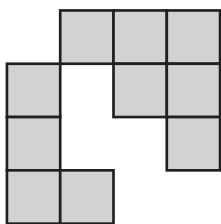


Area = ft²

Area = ft²

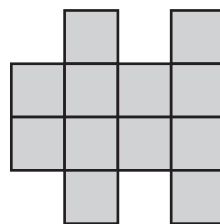
Area = ft²

13)




Area = ft²

14)



Area = ft²

15)



Area = ft²