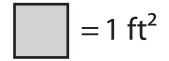


Name : _____

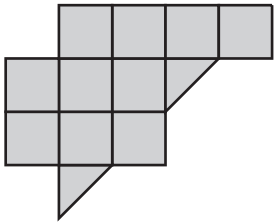
Counting Squares

L2S1



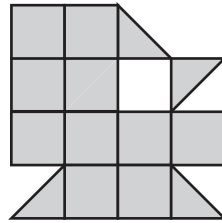
Find the area of each shape.

1)



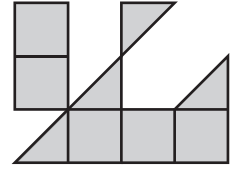
Area = ft²

2)



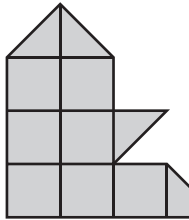
Area = ft²

3)



Area = ft²

4)



Area =

5)

PREVIEW

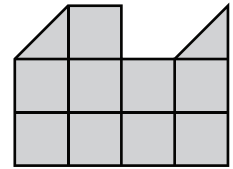
Gain complete access to the largest collection of worksheets in all subjects!

Members, please log in to download this worksheet.

Not a member? Please sign up to gain complete access.

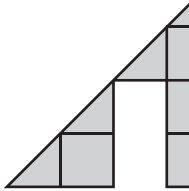
www.mathworksheets4kids.com

6)

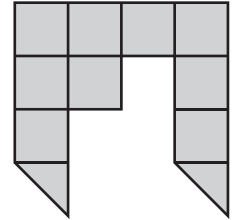


Area = ft²

7)

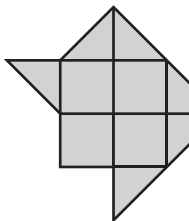


Area =



Area = ft²

10)

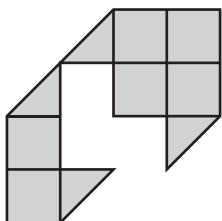


Area = ft²

Area = ft²

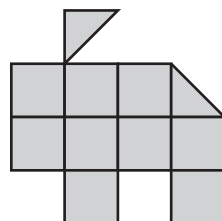
Area = ft²

13)



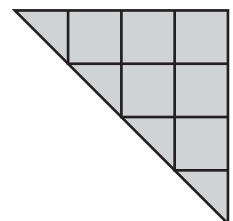
Area = ft²

14)



Area = ft²

15)



Area = ft²