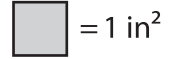


Name : _____

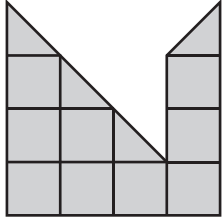
Counting Squares

L2S4



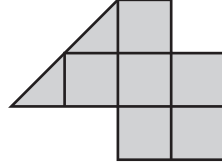
Find the area of each shape.

1)



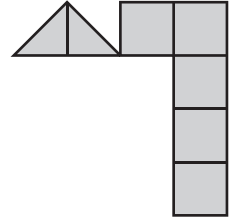
Area = in²

2)



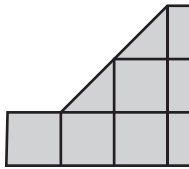
Area = in²

3)



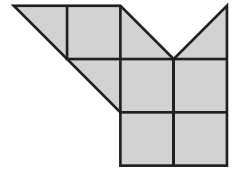
Area = in²

4)



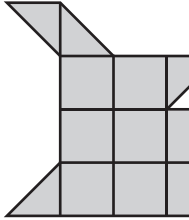
Area =

5)



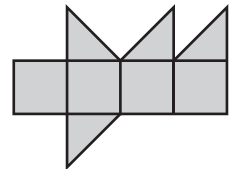
Area = in²

7)



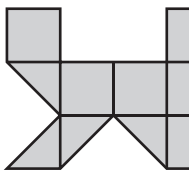
Area =

6)



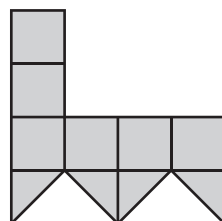
Area = in²

10)



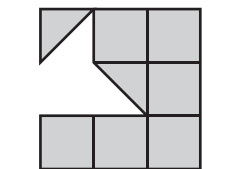
Area = in²

14)



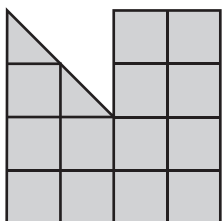
Area = in²

15)



Area = in²

13)



Area = in²

PREVIEW

Gain complete access to the largest collection of worksheets in all subjects!

Members, please log in to download this worksheet.

Not a member? Please sign up to gain complete access.

www.mathworksheets4kids.com