


Name : \_\_\_\_\_

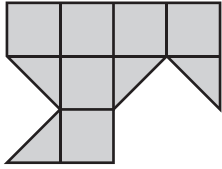
# Counting Squares

L2S5

 = 1 yd<sup>2</sup>

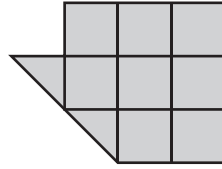
Find the area of each shape.

1)



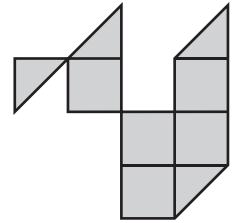
Area =  yd<sup>2</sup>

2)



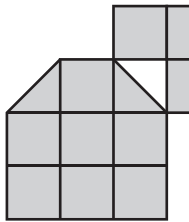
Area =  yd<sup>2</sup>

3)



Area =  yd<sup>2</sup>

4)



Area =

5)

**PREVIEW**

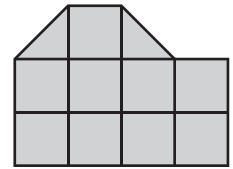
Gain complete access to the largest collection of worksheets in all subjects!

Members, please log in to download this worksheet.

Not a member? Please sign up to gain complete access.

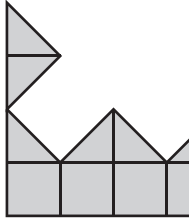
[www.mathworksheets4kids.com](http://www.mathworksheets4kids.com)

6)

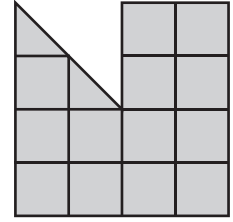


Area =  yd<sup>2</sup>

7)

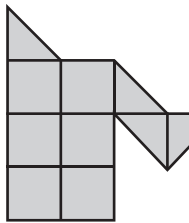


Area =



Area =  yd<sup>2</sup>

10)

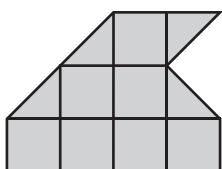


Area =  yd<sup>2</sup>

Area =  yd<sup>2</sup>

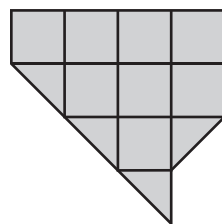
Area =  yd<sup>2</sup>

13)



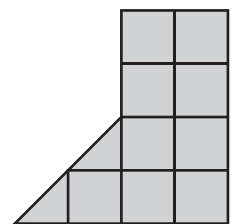
Area =  yd<sup>2</sup>

14)



Area =  yd<sup>2</sup>

15)



Area =  yd<sup>2</sup>