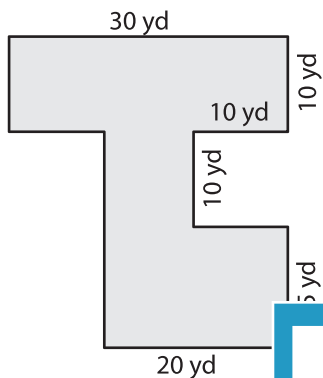


Name : _____

Area of Rectangular Paths

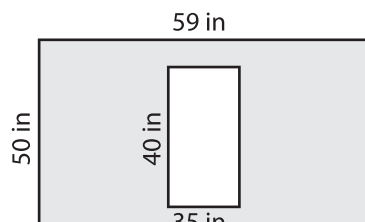
Find the area of each shaded region.

1)



Area = _____

2)



PREVIEW

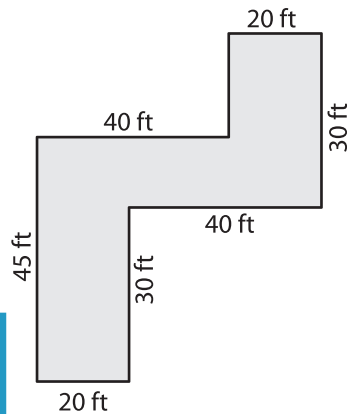
Gain complete access to the largest collection of worksheets in all subjects!

Members, please log in to download this worksheet.

Not a member? Please sign up to gain complete access.

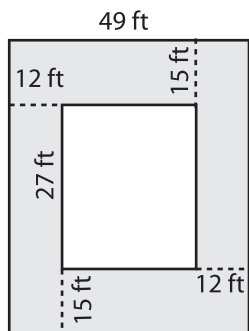
www.mathworksheets4kids.com

3)

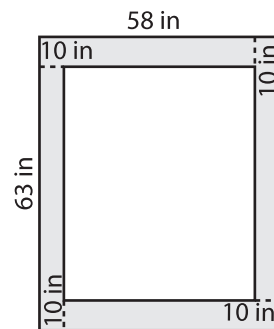


Area = _____

4)

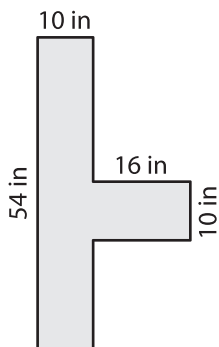


Area = _____

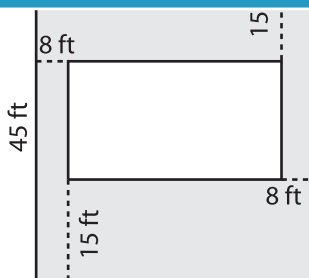


Area = _____

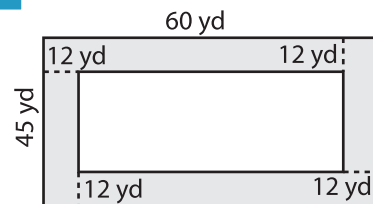
7)



Area = _____



Area = _____



Area = _____